

Regn plusstykkerne. Hvilket tal skal der stå for at regnestykket passer?



$$2 + \underline{\quad} = 10$$

4

8

9

7



$$9 + \underline{\quad} = 10$$

3

1

2

7



$$7 + \underline{\quad} = 10$$

4

5

3

6



$$6 + \underline{\quad} = 10$$

5

8

4

2



$$5 + \underline{\quad} = 10$$

6

3

4

5



$$8 + \underline{\quad} = 10$$

0

1

2

5



$$4 + \underline{\quad} = 10$$

4

5

7

6



$$3 + \underline{\quad} = 10$$

4

5

7

8

Regn plusstykkerne. Hvilket tal skal der stå for at regnestykket passer? **Løsning**



$$2 + 8 = 10$$

4	8	9	7
---	---	---	---



$$9 + 1 = 10$$

3	1	2	7
---	---	---	---



$$7 + 3 = 10$$

4	5	3	6
---	---	---	---



$$6 + 4 = 10$$

5	8	4	2
---	---	---	---



$$5 + \underline{\quad} = 10$$

6	3	4	5
---	---	---	---



$$8 + 2 = 10$$

0	1	2	5
---	---	---	---



$$4 + 6 = 10$$

4	5	7	6
---	---	---	---



$$3 + 7 = 10$$

4	5	7	8
---	---	---	---

Regn plusstykkerne. Hvilket tal skal der stå for at regnestykket passer?



$$3 + \underline{\quad} = 10$$

5

9

7

6



$$9 + \underline{\quad} = 10$$

2

4

3

1



$$8 + \underline{\quad} = 10$$

4

2

3

6



$$4 + \underline{\quad} = 10$$

5

7

6

3



$$5 + \underline{\quad} = 10$$

4

7

5

6




$$7 + \underline{\quad} = 10$$

3

5

6

2



$$0 + \underline{\quad} = 10$$

9

6

10

1



$$6 + \underline{\quad} = 10$$

7

3

4

6

Regn plusstykkerne. Hvilket tal skal der stå for at regnestykket passer? **Løsning**



$$3 + 7 = 10$$

5

9

7

6



$$9 + 1 = 10$$

2

4

3

1



$$8 + 2 = 10$$

4

2

3

6



$$4 + 6 = 10$$

5

7

6

3



$$5 + 5 = 10$$

4

7

5

6




$$7 + 3 = 10$$

3

5

6

2




$$0 + 10 = 10$$

9

6

10

1



$$6 + 4 = 10$$

7

3

4

6

Regn plusstykkerne. Hvilket tal skal der stå for at regnestykket passer?



$$7 + \underline{\quad} = 10$$

2

6

4

3



$$9 + \underline{\quad} = 10$$

0

5

1

10



$$6 + \underline{\quad} = 10$$

6

4

2

5



$$3 + \underline{\quad} = 10$$

7

8

5

3



$$5 + \underline{\quad} = 10$$

5

3

4

6



$$8 + \underline{\quad} = 10$$

3

5

4

2



$$4 + \underline{\quad} = 10$$

4

8

6

7



$$10 + \underline{\quad} = 10$$

1

0

10

8

Regn plusstykkerne. Hvilket tal skal der stå for at regnestykket passer? **Løsning**



$$7 + 3 = 10$$

2	6	4	3
---	---	---	---



$$9 + 1 = 10$$

0	5	1	10
---	---	---	----



$$6 + 4 = 10$$

6	4	2	5
---	---	---	---



$$3 + 7 = 10$$

7	8	5	3
---	---	---	---



$$5 + 5 = 10$$

5	3	4	6
---	---	---	---



$$8 + 2 = 10$$

3	5	4	2
---	---	---	---



$$4 + 6 = 10$$

4	8	6	7
---	---	---	---



$$10 + 0 = 10$$

1	0	10	8
---	---	----	---

Regn plusstykkerne. Hvilket tal skal der stå for at regnestykket passer?



$$12 + \underline{\quad} = 20$$

6

18

8

7



$$17 + \underline{\quad} = 20$$

3

7

5

13



$$10 + \underline{\quad} = 20$$

9

11

0

10



$$18 + \underline{\quad} = 20$$

3

4

2

7



$$14 + \underline{\quad} = 20$$

8

6

9

16



$$13 + \underline{\quad} = 20$$

8

4

9

7



$$16 + \underline{\quad} = 20$$

7

4

3

8



$$15 + \underline{\quad} = 20$$

5

6

9

2

Regn plusstykkerne. Hvilket tal skal der stå for at regnestykket passer? **Løsning**



$$12 + 8 = 20$$

6

18

8

7



$$17 + 3 = 20$$

3

7

5

13



$$10 + 10 = 20$$

9

11

0

10



$$18 + 2 = 20$$

3

4

2

7



$$14 + 6 = 20$$

8

6

9

16



$$13 + 7 = 20$$

8

4

9

7



$$16 + 4 = 20$$

7

4

3

8



$$15 + 5 = 20$$

5

6

9

2

Regn plusstykkerne. Hvilket tal skal der stå for at regnestykket passer?



$$4 + \underline{\quad} = 20$$

16

14

18

17



$$6 + \underline{\quad} = 20$$

15

12

14

11



$$11 + \underline{\quad} = 20$$

8

1

9

19



$$2 + \underline{\quad} = 20$$

15

17

19

18



$$15 + \underline{\quad} = 20$$

15

7

5

9



$$10 + \underline{\quad} = 20$$

11

12

10

13



$$8 + \underline{\quad} = 20$$

2

12

14

4



$$17 + \underline{\quad} = 20$$

13

11

5

3

Regn plusstykkerne. Hvilket tal skal der stå for at regnestykket passer? **Løsning**



$$4 + 16 = 20$$

16

14

18

17



$$6 + 14 = 20$$

15

12

14

11



$$11 + 9 = 20$$

8

1

9

19



$$2 + 18 = 20$$

15

17

19

18



$$15 + 5 = 20$$

15

7

5

9



$$10 + 10 = 20$$

11

12

10

13



$$8 + 12 = 20$$

2

12

14

4



$$17 + 3 = 20$$

13

11

5

3

Regn plusstykkerne. Hvilket tal skal der stå for at regnestykket passer?



$$11 + \underline{\quad} = 20$$

12	8	9	10
----	---	---	----



$$18 + \underline{\quad} = 20$$

3	4	8	2
---	---	---	---



$$0 + \underline{\quad} = 20$$

20	19	10	11
----	----	----	----



$$4 + \underline{\quad} = 20$$

17	6	16	9
----	---	----	---




$$9 + \underline{\quad} = 20$$

6	13	11	9
---	----	----	---




$$13 + \underline{\quad} = 20$$

7	9	11	3
---	---	----	---



$$16 + \underline{\quad} = 20$$

14	5	4	7
----	---	---	---



$$17 + \underline{\quad} = 20$$

15	5	2	3
----	---	---	---

Regn plusstykkerne. Hvilket tal skal der stå for at regnestykket passer? **Løsning**



$$11 + 9 = 20$$

12

8

9

10



$$18 + 2 = 20$$

3

4

8

2



$$0 + 20 = 20$$

20

19

10

11



$$4 + 16 = 20$$

17

6

16

9



$$9 + 11 = 20$$

6

13

11

9



$$13 + 7 = 20$$

7

9

11

3



$$16 + \underline{\quad} = 20$$

14

5

4

7



$$17 + 3 = 20$$

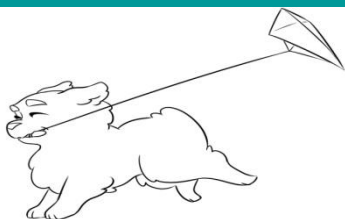
15

5

2

3

Regn plusstykkerne. Hvilket tal skal der stå for at regnestykket passer?



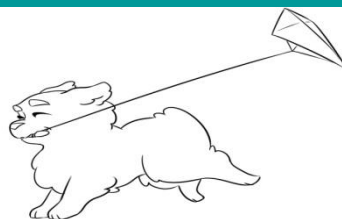
$$0 + \underline{\quad} = 20$$

10

20

18

11




$$11 + \underline{\quad} = 20$$

8

12

9

11




$$16 + \underline{\quad} = 20$$

14

3

6

4




$$9 + \underline{\quad} = 20$$

10

11

12

13




$$5 + \underline{\quad} = 20$$

15

6

5

17




$$17 + \underline{\quad} = 20$$

7

4

3

9




$$10 + \underline{\quad} = 20$$

11

19

13

10



$$2 + \underline{\quad} = 20$$

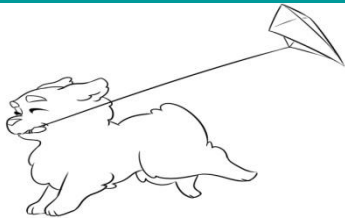
10

18

7

9

Regn plusstykkerne. Hvilket tal skal der stå for at regnestykket passer? **Løsning**



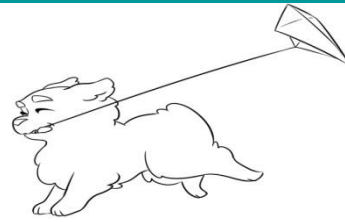
$$0 + 20 = 20$$

10

20

18

11




$$11 + 9 = 20$$

8

12

9

11



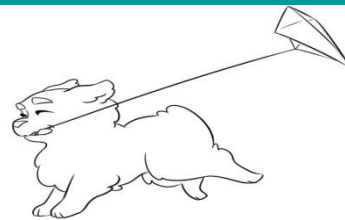
$$16 + 4 = 20$$

14

3

6

4



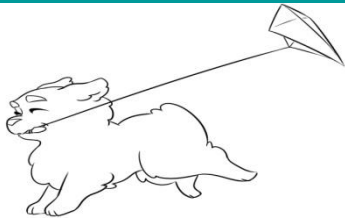
$$9 + 11 = 20$$

10

11

12

13



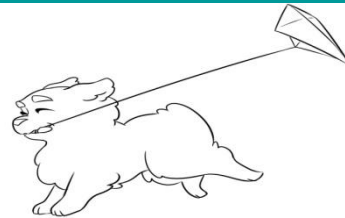
$$5 + 15 = 20$$

15

6

5

17



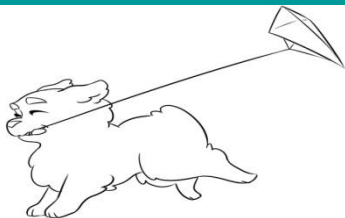
$$17 + 3 = 20$$

7

4

3

9



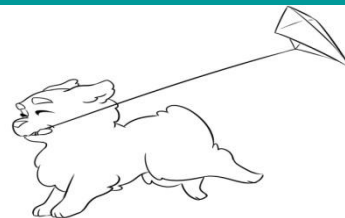
$$10 + 10 = 20$$

11

19

13

10



$$2 + 18 = 20$$

10

18

7

9

Regn plusstykkerne. Hvilket tal skal der stå for at regnestykket passer?



$$19 + \underline{\quad} = 30$$

21

13

10

11



$$15 + \underline{\quad} = 30$$

25

18

15

5



$$12 + \underline{\quad} = 30$$

8

18

16

28



$$18 + \underline{\quad} = 30$$

14

16

18

12



$$16 + \underline{\quad} = 30$$

18

17

15

14




$$17 + \underline{\quad} = 30$$

15

19

13

17



$$20 + \underline{\quad} = 30$$

20

15

10

21



$$22 + \underline{\quad} = 30$$

14

11

8

9

Regn plusstykkerne. Hvilket tal skal der stå for at regnestykket passer? **Løsning**



$$19 + \underline{\quad} = 30$$

21

13

10

11




$$15 + \underline{\quad} = 30$$

25

18

15

5



$$12 + \underline{\quad} = 30$$

8

18

16

28



$$18 + \underline{\quad} = 30$$

14

16

18

12



$$16 + \underline{\quad} = 30$$

18

17

15

14




$$17 + \underline{\quad} = 30$$

15

19

13

17




$$20 + \underline{\quad} = 30$$

20

15

10

21



$$22 + \underline{\quad} = 30$$

14

11

8

9

Regn plusstykkerne. Hvilket tal skal der stå for at regnestykket passer?



$$13 + \underline{\quad} = 30$$

13

12

17

16




$$23 + \underline{\quad} = 30$$

4

6

9

7




$$20 + \underline{\quad} = 30$$

20

15

10

18




$$17 + \underline{\quad} = 30$$

13

16

11

28




$$19 + \underline{\quad} = 30$$

11

16

20

12




$$12 + \underline{\quad} = 30$$

16

14

18

12




$$25 + \underline{\quad} = 30$$

15

10

5

25



$$21 + \underline{\quad} = 30$$

19

21

9

11

Regn plusstykkerne. Hvilket tal skal der stå for at regnestykket passer? **Løsning**




$$13 + 17 = 30$$

13	12	17	16
----	----	----	----




$$23 + 7 = 30$$

4	6	9	7
---	---	---	---




$$20 + 10 = 30$$

20	15	10	18
----	----	----	----




$$17 + 13 = 30$$

13	16	11	28
----	----	----	----




$$19 + 11 = 30$$

11	16	20	12
----	----	----	----




$$12 + 18 = 30$$

16	14	18	12
----	----	----	----



$$25 + 5 = 30$$

15	10	5	25
----	----	---	----



$$21 + 9 = 30$$

19	21	9	11
----	----	---	----

Regn plusstykkerne. Hvilket tal skal der stå for at regnestykket passer?



$$17 + \underline{\quad} = 30$$

14

17

13

15



$$13 + \underline{\quad} = 30$$

19

13

27

17



$$12 + \underline{\quad} = 30$$

19

28

18

11



$$14 + \underline{\quad} = 30$$

26

16

19

14




$$11 + \underline{\quad} = 30$$

19

12

18

16



$$15 + \underline{\quad} = 30$$

25

5

18

15



$$10 + \underline{\quad} = 30$$

10

12

15

20



$$19 + \underline{\quad} = 30$$

11

15

21

31

Regn plusstykkerne. Hvilket tal skal der stå for at regnestykket passer? **Løsning**



$$17 + 13 = 30$$

14

17

13

15



$$13 + 17 = 30$$

19

13

27

17



$$12 + 18 = 30$$

19

28

18

11



$$14 + 16 = 30$$

26

16

19

14



$$11 + 19 = 30$$

19

12

18

16



$$15 + 15 = 30$$

25

5

18

15



$$10 + 20 = 30$$

10

12

15

20



$$19 + 11 = 30$$

11

15

21

31

Regn plusstykkerne. Hvilket tal skal der stå for at regnestykket passer?



$$12 + \underline{\quad} = 30$$

18

17

12

19



$$14 + \underline{\quad} = 30$$

13

16

19

14



$$21 + \underline{\quad} = 30$$

6

19

5

9




$$25 + \underline{\quad} = 30$$

10

15

5

20




$$10 + \underline{\quad} = 30$$

11

20

30

9




$$19 + \underline{\quad} = 30$$

10

11

16

14




$$23 + \underline{\quad} = 30$$

6

2

9

7



$$26 + \underline{\quad} = 30$$

6

8

4

10

Regn plusstykkerne. Hvilket tal skal der stå for at regnestykket passer? **Løsning**



$$12 + 18 = 30$$

18	17	12	19
----	----	----	----



$$14 + 16 = 30$$

13	16	19	14
----	----	----	----



$$21 + 9 = 30$$

6	19	5	9
---	----	---	---



$$25 + 5 = 30$$

10	15	5	20
----	----	---	----




$$10 + 20 = 30$$

11	20	30	9
----	----	----	---




$$19 + 11 = 30$$

10	11	16	14
----	----	----	----



$$23 + 7 = 30$$

6	2	9	7
---	---	---	---



$$26 + 4 = 30$$

6	8	4	10
---	---	---	----

Regn plusstykkerne. Hvilket tal skal der stå for at regnestykket passer?



$$21 + \underline{\quad} = 30$$

9

8

3

6



$$27 + \underline{\quad} = 30$$

1

4

3

2



$$28 + \underline{\quad} = 30$$

3

12

2

5



$$26 + \underline{\quad} = 30$$

16

4

6

14



$$23 + \underline{\quad} = 30$$

7

5

12

8



$$24 + \underline{\quad} = 30$$

7

5

9

6



$$29 + \underline{\quad} = 30$$

10

11

2

1



$$19 + \underline{\quad} = 30$$

10

9

11

12

Regn plusstykkerne. Hvilket tal skal der stå for at regnestykket passer? **Løsning**



$$21 + 9 = 30$$

9

8

3

6



$$27 + 3 = 30$$

1

4

3

2



$$28 + 2 = 30$$

3

12

2

5



$$26 + 4 = 30$$

16

4

6

14



$$23 + 7 = 30$$

7

5

12

8



$$24 + 6 = 30$$

7

5

9

6



$$29 + 1 = 30$$

10

11

2

1



$$19 + 11 = 30$$

10

9

11

12