


Regn plusstykkerne. Hvilket tal skal der stå for at regnestykket passer?



$$19 + \underline{\quad} = 30$$

21

13

10

11



$$15 + \underline{\quad} = 30$$

25

18

15

5



$$12 + \underline{\quad} = 30$$

8

18

16

28




$$18 + \underline{\quad} = 30$$

14

16

18

12



$$16 + \underline{\quad} = 30$$

18

17

15

14



$$17 + \underline{\quad} = 30$$

15

19

13

17



$$20 + \underline{\quad} = 30$$

20

15

10

21



$$22 + \underline{\quad} = 30$$

14

11

8

9

Regn plusstykkerne. Hvilket tal skal der stå for at regnestykket passer? **Løsning**



$$19 + \underline{\quad} = 30$$

21

13

10

11



$$15 + \underline{\quad} = 30$$

25

18

15

5



$$12 + \underline{\quad} = 30$$

8

18

16

28



$$18 + \underline{\quad} = 30$$

14

16

18

12



$$16 + \underline{\quad} = 30$$

18

17

15

14




$$17 + \underline{\quad} = 30$$

15

19

13

17



$$20 + \underline{\quad} = 30$$

20

15

10

21



$$22 + \underline{\quad} = 30$$

14

11

8

9