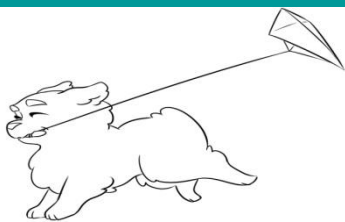


Regn plusstykkerne. Hvilket tal skal der stå for at regnestykket passer?



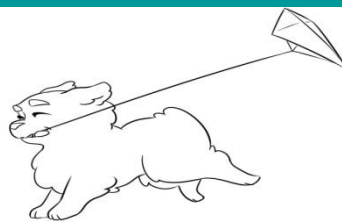
$$0 + \underline{\quad} = 20$$

10

20

18

11



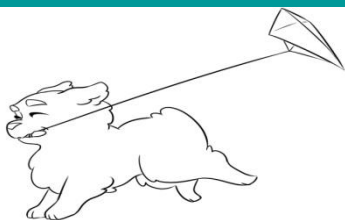
$$11 + \underline{\quad} = 20$$

8

12

9

11



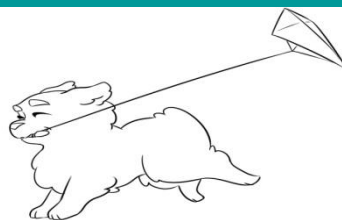
$$16 + \underline{\quad} = 20$$

14

3

6

4



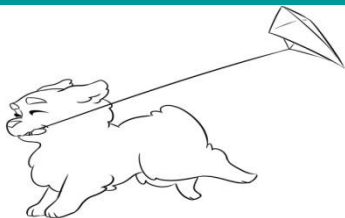
$$9 + \underline{\quad} = 20$$

10

11

12

13



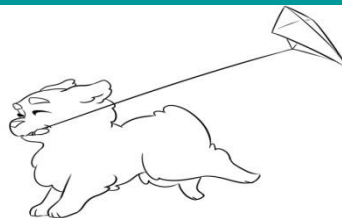
$$5 + \underline{\quad} = 20$$

15

6

5

17



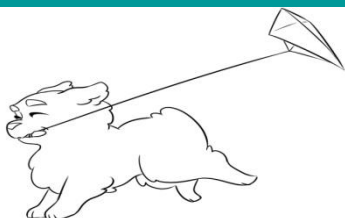
$$17 + \underline{\quad} = 20$$

7

4

3

9



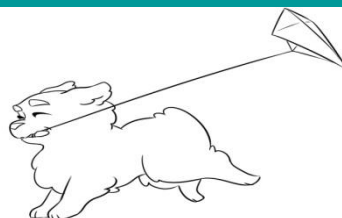
$$10 + \underline{\quad} = 20$$

11

19

13

10



$$2 + \underline{\quad} = 20$$

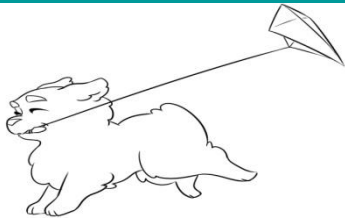
10

18

7

9

Regn plusstykkerne. Hvilket tal skal der stå for at regnestykket passer? **Løsning**



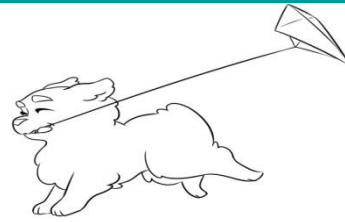
$$0 + 20 = 20$$

10

20

18

11




$$11 + 9 = 20$$

8

12

9

11



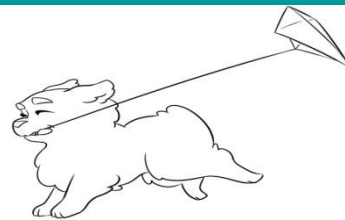
$$16 + 4 = 20$$

14

3

6

4



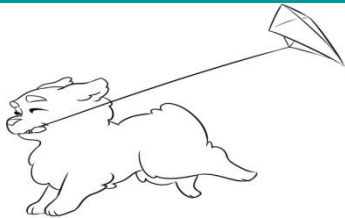
$$9 + 11 = 20$$

10

11

12

13



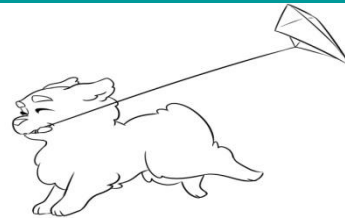
$$5 + 15 = 20$$

15

6

5

17




$$17 + 3 = 20$$

7

4

3

9



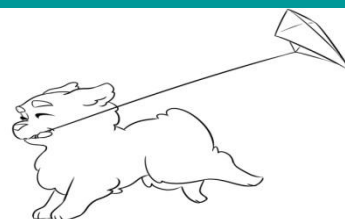
$$10 + 10 = 20$$

11

19

13

10



$$2 + 18 = 20$$

10

18

7

9