

Regn plusstykkerne. Hvilket tal skal der stå for at regnestykket passer?



$$11 + \underline{\quad} = 20$$

12	8	9	10
----	---	---	----



$$18 + \underline{\quad} = 20$$

3	4	8	2
---	---	---	---




$$0 + \underline{\quad} = 20$$

20	19	10	11
----	----	----	----




$$4 + \underline{\quad} = 20$$

17	6	16	9
----	---	----	---




$$9 + \underline{\quad} = 20$$

6	13	11	9
---	----	----	---




$$13 + \underline{\quad} = 20$$

7	9	11	3
---	---	----	---



$$16 + \underline{\quad} = 20$$

14	5	4	7
----	---	---	---



$$17 + \underline{\quad} = 20$$

15	5	2	3
----	---	---	---

Regn plusstykkerne. Hvilket tal skal der stå for at regnestykket passer? **Løsning**



$$11 + 9 = 20$$

12

8

9

10



$$18 + 2 = 20$$

3

4

8

2



$$0 + 20 = 20$$

20

19

10

11



$$4 + 16 = 20$$

17

6

16

9



$$9 + 11 = 20$$

6

13

11

9



$$13 + 7 = 20$$

7

9

11

3



$$16 + \underline{\quad} = 20$$

14

5

4

7



$$17 + 3 = 20$$

15

5

2

3