

Regn minusstykkerne. Hvilket tal skal der stå for at regnestykket passer?



$$12 - \underline{\quad} = 10$$

2

4

3

1



$$17 - \underline{\quad} = 10$$

6

5

3

7



$$11 - \underline{\quad} = 10$$

4

7

1

6



$$14 - \underline{\quad} = 10$$

2

5

4

7



$$15 - \underline{\quad} = 10$$

3

8

5

2



$$19 - \underline{\quad} = 10$$

8

9

7

4



$$16 - \underline{\quad} = 10$$

4

7

6

9



$$13 - \underline{\quad} = 10$$

3

2

5

3

Regn minusstykkerne. Hvilket tal skal der stå for at regnestykket passer? **Løsning**



$$12 - 2 = 10$$

2

4

3

1



$$17 - 7 = 10$$

6

5

3

7



$$11 - 1 = 10$$

4

7

1

6



$$14 - 4 = 10$$

2

5

4

7



$$15 - 5 = 10$$

3

8

5

2



$$19 - 9 = 10$$

8

9

7

4



$$16 - 6 = 10$$

4

7

6

9



$$13 - 3 = 10$$

3

2

5

3

Regn minusstykkerne. Hvilket tal skal der stå for at regnestykket passer?



$$13 - \underline{\quad} = 10$$

2	7	3	9
---	---	---	---



$$11 - \underline{\quad} = 10$$

5	7	1	2
---	---	---	---



$$18 - \underline{\quad} = 10$$

6	4	7	8
---	---	---	---



$$15 - \underline{\quad} = 10$$

5	6	7	9
---	---	---	---



$$17 - \underline{\quad} = 10$$

5	3	7	9
---	---	---	---



$$10 - \underline{\quad} = 10$$

1	5	0	10
---	---	---	----



$$14 - \underline{\quad} = 10$$

4	6	8	14
---	---	---	----



$$19 - \underline{\quad} = 10$$

19	6	9	8
----	---	---	---

Regn minusstykkerne. Hvilket tal skal der stå for at regnestykket passer? **Løsning**



$$13 - 3 = 10$$

2	7	3	9
---	---	---	---



$$11 - 1 = 10$$

5	7	1	2
---	---	---	---



$$18 - 8 = 10$$

6	4	7	8
---	---	---	---



$$15 - 5 = 10$$

5	6	7	9
---	---	---	---



$$17 - 7 = 10$$

5	3	7	9
---	---	---	---



$$10 - 0 = 10$$

1	5	0	10
---	---	---	----



$$14 - 4 = 10$$

4	6	8	14
---	---	---	----



$$19 - 9 = 10$$

19	6	9	8
----	---	---	---

Regn minusstykkerne. Hvilket tal skal der stå for at regnestykket passer?



$$22 - \underline{\quad} = 10$$

23

2

12

5



$$19 - \underline{\quad} = 10$$

19

6

9

4



$$17 - \underline{\quad} = 10$$

16

6

10

7



$$22 - \underline{\quad} = 10$$

14

22

15

12



$$23 - \underline{\quad} = 10$$

13

3

15

17



$$26 - \underline{\quad} = 10$$

15

12

16

13



$$25 - \underline{\quad} = 10$$

17

14

15

19



$$20 - \underline{\quad} = 10$$

10

20

1

13

Regn minusstykkerne. Hvilket tal skal der stå for at regnestykket passer? **Løsning**



$$22 - 12 = 10$$

23	2	12	5
----	---	----	---



$$19 - 9 = 10$$

19	6	9	4
----	---	---	---



$$17 - 7 = 10$$

16	6	10	7
----	---	----	---



$$22 - 12 = 10$$

14	22	15	12
----	----	----	----



$$23 - 13 = 10$$

13	3	15	17
----	---	----	----



$$26 - 16 = 10$$

15	12	16	13
----	----	----	----



$$25 - 15 = 10$$

17	14	15	19
----	----	----	----



$$20 - 10 = 10$$

10	20	1	13
----	----	---	----

Regn minusstykkerne. Hvilket tal skal der stå for at regnestykket passer?



$$22 - \underline{\quad} = 20$$

3

6

2

4



$$25 - \underline{\quad} = 20$$

5

4

2

6



$$29 - \underline{\quad} = 20$$

8

9

6

7




$$27 - \underline{\quad} = 20$$

6

4

7

9



$$23 - \underline{\quad} = 20$$

3

2

1

0




$$20 - \underline{\quad} = 20$$

2

1

0

10




$$21 - \underline{\quad} = 20$$

0

1

2

4



$$28 - \underline{\quad} = 20$$

8

6

4

9

Regn minusstykkerne. Hvilket tal skal der stå for at regnestykket passer? **Løsning**



$$22 - 2 = 20$$

3	6	2	4
---	---	---	---



$$25 - 5 = 20$$

5	4	2	6
---	---	---	---



$$29 - 9 = 20$$

8	9	6	7
---	---	---	---



$$27 - 7 = 20$$

6	4	7	9
---	---	---	---




$$23 - 3 = 20$$

3	2	1	0
---	---	---	---




$$20 - 0 = 20$$

2	1	0	10
---	---	---	----



$$21 - 1 = 20$$


0	1	2	4
---	---	---	---



$$28 - 8 = 20$$

8	6	4	9
---	---	---	---

Regn minusstykkerne. Hvilket tal skal der stå for at regnestykket passer?




$$30 - \underline{\quad} = 20$$

20

0

10

5




$$31 - \underline{\quad} = 20$$

1

21

2

11




$$29 - \underline{\quad} = 20$$

7

9

5

3




$$32 - \underline{\quad} = 20$$

12

14

19

17




$$34 - \underline{\quad} = 20$$

10

4

14

16




$$25 - \underline{\quad} = 20$$

20

10

5

15




$$27 - \underline{\quad} = 20$$

10

4

7

9



$$29 - \underline{\quad} = 20$$


9

7

8

11

Regn minusstykkerne. Hvilket tal skal der stå for at regnestykket passer? **Løsning**




$$30 - \underline{\quad} = 20$$

20

0

10

5




$$31 - \underline{\quad} = 20$$

1

21

2

11




$$29 - \underline{\quad} = 20$$

7

9

5

3




$$32 - \underline{\quad} = 20$$

12

14

19

17




$$34 - \underline{\quad} = 20$$

10

4

14

16




$$25 - \underline{\quad} = 20$$

20

10

5

15




$$27 - \underline{\quad} = 20$$

10

4

7

9



$$29 - \underline{\quad} = 20$$

9

7

8

11

Regn minusstykkerne. Hvilket tal skal der stå for at regnestykket passer?



$$29 - \underline{\quad} = 20$$

8

19

11

9



$$37 - \underline{\quad} = 20$$

27

7

20

17



$$31 - \underline{\quad} = 20$$

1

30

11

21



$$39 - \underline{\quad} = 20$$

9

19

39

29



$$27 - \underline{\quad} = 20$$

7

17

8

5




$$20 - \underline{\quad} = 20$$

2

0

10

5



$$33 - \underline{\quad} = 20$$

3

17

13

15



$$30 - \underline{\quad} = 20$$

20

0

30

10

Regn minusstykkerne. Hvilket tal skal der stå for at regnestykket passer? **Løsning**



$$29 - 9 = 20$$

8	19	11	9
---	----	----	---



$$37 - 17 = 20$$

27	7	20	17
----	---	----	----



$$31 - 11 = 20$$

1	30	11	21
---	----	----	----



$$39 - 19 = 20$$

9	19	39	29
---	----	----	----



$$27 - 7 = 20$$

7	17	8	5
---	----	---	---



$$20 - 0 = 20$$

2	0	10	5
---	---	----	---



$$33 - 13 = 20$$

3	17	13	15
---	----	----	----



$$30 - 10 = 20$$

20	0	30	10
----	---	----	----

Regn minusstykkerne. Hvilket tal skal der stå for at regnestykket passer?



$$32 - \underline{\quad} = 30$$

0

3

1

2



$$37 - \underline{\quad} = 30$$

6

7

9

13



$$34 - \underline{\quad} = 30$$

3

4

5

2



$$30 - \underline{\quad} = 30$$

1

10

5

0



$$31 - \underline{\quad} = 30$$

1

0

11

4



$$35 - \underline{\quad} = 30$$

15

10

5

7



$$39 - \underline{\quad} = 30$$

8

5

9

7



$$36 - \underline{\quad} = 30$$

7

5

3

6

Regn minusstykkerne. Hvilket tal skal der stå for at regnestykket passer? **Løsning**



$$32 - 2 = 30$$

0	3	1	2
---	---	---	---



$$37 - 7 = 30$$

6	7	9	13
---	---	---	----



$$34 - 4 = 30$$

3	4	5	2
---	---	---	---



$$30 - 0 = 30$$

1	10	5	0
---	----	---	---



$$31 - 1 = 30$$

1	0	11	4
---	---	----	---



$$35 - 5 = 30$$

15	10	5	7
----	----	---	---



$$39 - 9 = 30$$

8	5	9	7
---	---	---	---



$$36 - 6 = 30$$

7	5	3	6
---	---	---	---

Regn minusstykkerne. Hvilket tal skal der stå for at regnestykket passer?



$$37 - \underline{\quad} = 30$$

9	7	6	8
---	---	---	---



$$39 - \underline{\quad} = 30$$

8	4	6	9
---	---	---	---



$$41 - \underline{\quad} = 30$$

1	20	11	10
---	----	----	----



$$45 - \underline{\quad} = 30$$

5	10	9	15
---	----	---	----



$$35 - \underline{\quad} = 30$$

5	7	15	10
---	---	----	----



$$33 - \underline{\quad} = 30$$

4	7	3	2
---	---	---	---



$$38 - \underline{\quad} = 30$$

18	0	8	15
----	---	---	----



$$46 - \underline{\quad} = 30$$

6	15	30	16
---	----	----	----

Regn minusstykkerne. Hvilket tal skal der stå for at regnestykket passer? **Løsning**



$$37 - 7 = 30$$

9	7	6	8
---	---	---	---



$$39 - 9 = 30$$

8	4	6	9
---	---	---	---



$$41 - 11 = 30$$

1	20	11	10
---	----	----	----



$$45 - 15 = 30$$

5	10	9	15
---	----	---	----



$$35 - 5 = 30$$

5	7	15	10
---	---	----	----



$$33 - 3 = 30$$

4	7	3	2
---	---	---	---



$$38 - 8 = 30$$

18	0	8	15
----	---	---	----



$$46 - 16 = 30$$

6	15	30	16
---	----	----	----

Regn minusstykkerne. Hvilket tal skal der stå for at regnestykket passer?



$$39 - \underline{\quad} = 30$$

6

4

19

9



$$37 - \underline{\quad} = 30$$

7

6

9

12



$$33 - \underline{\quad} = 30$$

3

11

7

2



$$36 - \underline{\quad} = 30$$

5

12

6

19



$$35 - \underline{\quad} = 30$$

7

15

5

10



$$32 - \underline{\quad} = 30$$

4

8

3

2



$$38 - \underline{\quad} = 30$$

0

8

9

3



$$31 - \underline{\quad} = 30$$

0

30

10

1

Regn minusstykkerne. Hvilket tal skal der stå for at regnestykket passer? **Løsning**



$$39 - \underline{\quad} = 30$$

6

4

19

9



$$37 - \underline{\quad} = 30$$

7

6

9

12



$$33 - \underline{\quad} = 30$$

3

11

7

2



$$36 - \underline{\quad} = 30$$

5

12

6

19



$$35 - \underline{\quad} = 30$$

7

15

5

10



$$32 - \underline{\quad} = 30$$

4

8

3

2



$$38 - \underline{\quad} = 30$$

0

8

9

3



$$31 - \underline{\quad} = 30$$

0

30

10

1