


Regn minusstykkerne. Hvilket tal skal der stå for at regnestykket passer?




$$30 - \underline{\quad} = 20$$

20

0

10

5




$$31 - \underline{\quad} = 20$$

1

21

2

11




$$29 - \underline{\quad} = 20$$

7

9

5

3




$$32 - \underline{\quad} = 20$$

12

14

19

17




$$34 - \underline{\quad} = 20$$

10

4

14

16




$$25 - \underline{\quad} = 20$$

20

10

5

15



$$27 - \underline{\quad} = 20$$

10

4

7

9



$$29 - \underline{\quad} = 20$$


9

7

8

11

Regn minusstykkerne. Hvilket tal skal der stå for at regnestykket passer? **Løsning**




$$30 - \underline{\quad} = 20$$

20

0

10

5




$$31 - \underline{\quad} = 20$$

1

21

2

11



$$29 - \underline{\quad} = 20$$

7

9

5

3



$$32 - \underline{\quad} = 20$$

12

14

19

17



$$34 - \underline{\quad} = 20$$

10

4

14

16



$$25 - \underline{\quad} = 20$$

20

10

5

15



$$27 - \underline{\quad} = 20$$

10

4

7

9



$$29 - \underline{\quad} = 20$$

9

7

8

11