



Større eller mindre end

En kat er større end en mus



En and er mindre end en gris

8		2
---	--	---

8		9
---	--	---

2		3
---	--	---

6		3
---	--	---

5		4
---	--	---

5		3
---	--	---

5		7
---	--	---

7		9
---	--	---

7		5
---	--	---



8		4
---	--	---

9		8
---	--	---

1		3
---	--	---

Større eller mindre end **LØSNING**

En kat er større end en mus



En and er mindre end en gris

8	>	2
---	---	---

8	<	9
---	---	---

2	<	3
---	---	---

6	>	3
---	---	---

5	>	4
---	---	---

5	>	3
---	---	---

5	<	7
---	---	---

7	<	9
---	---	---

7	>	5
---	---	---

8	>	4
---	---	---

9	>	8
---	---	---

1	<	3
---	---	---