


Større eller mindre end

En hest er større end en hund



En slange er mindre end en elefant

1		4
---	--	---

8		4
---	--	---

3		2
---	--	---

0		9
---	--	---

9		7
---	--	---

3		7
---	--	---

1		3
---	--	---

9		5
---	--	---

5		2
---	--	---


6		7
---	--	---

4		9
---	--	---

6		1
---	--	---

Større eller mindre **LØSNING**

En hest er større end en hund



En slange er mindre end en elefant

1	<	4
---	---	---

8	>	4
---	---	---

3	>	2
---	---	---

0	<	9
---	---	---

9	>	7
---	---	---

3	<	7
---	---	---

1	<	3
---	---	---

9	>	5
---	---	---

5	>	2
---	---	---

6	<	7
---	---	---

4	<	9
---	---	---

6	>	1
---	---	---

Større eller mindre end

En zebra er større end et vortesvin



Et jordegern er mindre end en kænguru

3		1
---	--	---

1		4
---	--	---

7		8
---	--	---

9		4
---	--	---

5		2
---	--	---

6		8
---	--	---

8		6
---	--	---

7		1
---	--	---

0		9
---	--	---

4		6
---	--	---

5		6
---	--	---

3		2
---	--	---

Større eller mindre end **LØSNING**

En zebra er større end et vortesvin



Et jordegern er mindre end en kænguru

3	>	1
---	---	---

1	<	4
---	---	---

7	<	8
---	---	---

9	>	4
---	---	---

5	>	2
---	---	---

6	<	8
---	---	---

8	>	6
---	---	---

7	>	1
---	---	---

0	<	9
---	---	---





4	<	6
---	---	---

5	<	6
---	---	---

3	>	2
---	---	---

Større eller mindre end

En kat er større end en mus



En and er mindre end en gris

8		2
---	--	---

8		9
---	--	---

2		3
---	--	---

6		3
---	--	---

5		4
---	--	---

5		3
---	--	---

5		7
---	--	---

7		9
---	--	---

7		5
---	--	---




8		4
---	--	---

9		8
---	--	---

1		3
---	--	---

Større eller mindre end **LØSNING**

En kat er større end en mus



En and er mindre end en gris

8	>	2
---	---	---

8	<	9
---	---	---

2	<	3
---	---	---

6	>	3
---	---	---

5	>	4
---	---	---

5	>	3
---	---	---

5	<	7
---	---	---

7	<	9
---	---	---

7	>	5
---	---	---


8	>	4
---	---	---

9	>	8
---	---	---

1	<	3
---	---	---

Større eller mindre end

Et pindsvin er større end en bille



Et blad er mindre end et træ

2		3
---	--	---

1		0
---	--	---

8		7
---	--	---

7		1
---	--	---

5		8
---	--	---

3		9
---	--	---

6		4
---	--	---

6		4
---	--	---

5		2
---	--	---

2		9
---	--	---

4		7
---	--	---

8		6
---	--	---

Større eller mindre end **LØSNING**

Et pindsvin er større end en bille



Et blad er mindre end et træ

2	<	3
---	---	---

1	>	0
---	---	---

8	>	7
---	---	---

7	>	1
---	---	---

5	<	8
---	---	---

3	<	9
---	---	---

6	>	4
---	---	---

6	>	4
---	---	---

5	>	2
---	---	---

2	<	9
---	---	---

4	<	7
---	---	---

8	>	6
---	---	---

Større eller mindre end

Et slot er større end en trolde



En fe er mindre end en drage

2		4
---	--	---

7		6
---	--	---

9		4
---	--	---

7		9
---	--	---

5		7
---	--	---

6		7
---	--	---

8		3
---	--	---

4		2
---	--	---

1		5
---	--	---

5		8
---	--	---

6		5
---	--	---

3		4
---	--	---

Større eller mindre end **LØSNING**

Et slot er større end en trolde



En fe er mindre end en drage

2	<	4
---	---	---

7	>	6
---	---	---

9	>	4
---	---	---

7	<	9
---	---	---

5	<	7
---	---	---

6	<	7
---	---	---

8	>	3
---	---	---

4	>	2
---	---	---

1	<	5
---	---	---



5	<	8
---	---	---

6	>	5
---	---	---

3	<	4
---	---	---

Større eller mindre end

En blomst er større end en myg



En sommerfugl er mindre end en fugl

2		3
---	--	---

8		7
---	--	---

2		1
---	--	---

7		9
---	--	---

4		6
---	--	---

9		6
---	--	---

5		6
---	--	---

8		9
---	--	---

3		2
---	--	---


5		4
---	--	---

6		4
---	--	---

5		7
---	--	---

Større eller mindre end **LØSNING**

En blomst er større end en myg



En sommerfugl er mindre end en fugl

2	<	3
---	---	---

8	>	7
---	---	---

2	>	1
---	---	---

7	<	9
---	---	---

4	<	6
---	---	---

9	>	6
---	---	---

5	<	6
---	---	---

8	<	9
---	---	---

3	>	2
---	---	---


5	>	4
---	---	---

6	>	4
---	---	---

5	<	7
---	---	---

Større eller mindre end

En måge er større end en sommerfugl



En fjer er mindre end en ørn

3	<	8
---	---	---

8	>	7
---	---	---

1	<	5
---	---	---

4	<	9
---	---	---

3	>	1
---	---	---

3	<	5
---	---	---

5	<	7
---	---	---

3	>	0
---	---	---

5	>	2
---	---	---

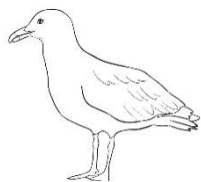
0	<	7
---	---	---

7	>	6
---	---	---

5	>	4
---	---	---

Større eller mindre end **LØSNING**

En måge er større end en sommerfugl



En fjer er mindre end en ørn

3	<	8
---	---	---

8	>	7
---	---	---

1	<	5
---	---	---

4	<	9
---	---	---

3	>	1
---	---	---

3	<	5
---	---	---

5	<	7
---	---	---

3	>	0
---	---	---

5	>	2
---	---	---

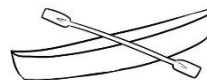
0	<	7
---	---	---

7	>	6
---	---	---

5	>	4
---	---	---

Større eller mindre end

En hval er større end en kajak



En fisk er mindre end en hvalros

5		3
---	--	---

4		6
---	--	---

2		5
---	--	---

0		1
---	--	---

8		6
---	--	---

8		7
---	--	---

3		7
---	--	---

1		2
---	--	---

7		9
---	--	---

9		6
---	--	---

6		4
---	--	---

3		1
---	--	---

Større eller mindre end **LØSNING**

En hval er større end en kajak



En fisk er mindre end en hvalros

5	>	3
---	---	---

4	<	6
---	---	---

2	<	5
---	---	---

0	<	1
---	---	---

8	>	6
---	---	---

8	>	7
---	---	---

3	<	7
---	---	---

1	<	2
---	---	---

7	<	9
---	---	---



9	>	6
---	---	---

6	>	4
---	---	---

3	>	1
---	---	---

Større eller mindre end

En sæl er større end en fisk



Et sneglehus er mindre end en haj

9		0
---	--	---

6		9
---	--	---

2		5
---	--	---

7		6
---	--	---

6		3
---	--	---

5		7
---	--	---

5		2
---	--	---

4		1
---	--	---

1		7
---	--	---


3		5
---	--	---

0		6
---	--	---

3		1
---	--	---

Større eller mindre end **LØSNING**

En sæl er større end en fisk



Et sneglehus er mindre end en haj

9	>	0
---	---	---

6	<	9
---	---	---

2	<	5
---	---	---

7	>	6
---	---	---

6	>	3
---	---	---

5	<	7
---	---	---

5	>	2
---	---	---

4	>	1
---	---	---

1	<	7
---	---	---

3	<	5
---	---	---

0	<	6
---	---	---

3	>	1
---	---	---

Større eller mindre end

En ørn er større end en fjer



En indianerpige er mindre end en tipi

2		1
---	--	---

9		5
---	--	---

2		3
---	--	---

5		7
---	--	---

4		3
---	--	---

1		2
---	--	---

4		6
---	--	---

8		5
---	--	---

7		9
---	--	---

4		8
---	--	---

8		6
---	--	---

7		3
---	--	---

Større eller mindre end **LØSNING**

En ørn er større end en fjer



En indianerpige er mindre end en tipi

2	>	1
---	---	---

9	>	5
---	---	---

2	<	3
---	---	---

5	<	7
---	---	---

4	>	3
---	---	---

1	<	2
---	---	---

4	<	6
---	---	---

8	>	5
---	---	---

7	<	9
---	---	---


4	<	8
---	---	---

8	>	6
---	---	---

7	>	3
---	---	---

Større eller mindre end

En pirat er større end en sabel



Et anker er mindre end et skib

8		9
---	--	---

6		2
---	--	---

7		4
---	--	---

5		1
---	--	---

6		8
---	--	---

1		4
---	--	---

9		3
---	--	---

9		7
---	--	---

2		7
---	--	---


0		6
---	--	---

3		5
---	--	---

3		1
---	--	---

Større eller mindre end **LØSNING**

En pirat er større end en sabel



Et anker er mindre end et skib

8	<	9
---	---	---

6	>	2
---	---	---

7	>	4
---	---	---

5	>	1
---	---	---

6	<	8
---	---	---

1	<	4
---	---	---

9	>	3
---	---	---

9	>	7
---	---	---

2	<	7
---	---	---



0	<	6
---	---	---

3	<	5
---	---	---

3	>	1
---	---	---

Større eller mindre end

Jorden er større end en satellit



En astronaut er mindre end en rumstation

1		2
---	--	---

6		2
---	--	---

5		7
---	--	---

7		4
---	--	---

4		2
---	--	---

3		5
---	--	---

7		5
---	--	---

0		4
---	--	---

4		8
---	--	---



2		1
---	--	---

9		7
---	--	---

7		9
---	--	---

Større eller mindre end **LØSNING**

Jorden er større end en satellit



En astronaut er mindre end en rumstation

1	<	2
---	---	---

6	>	2
---	---	---

5	<	7
---	---	---

7	>	4
---	---	---

4	>	2
---	---	---

3	<	5
---	---	---

7	>	5
---	---	---

0	<	4
---	---	---

4	<	8
---	---	---

2	>	1
---	---	---

9	>	7
---	---	---

7	<	9
---	---	---

Større eller mindre end

Et sandslot er større end et sneglehus



>



<



En bi er mindre end en is

7		9
---	--	---

4		6
---	--	---

8		5
---	--	---

3		1
---	--	---

4		7
---	--	---

5		7
---	--	---

7		4
---	--	---

2		0
---	--	---

2		6
---	--	---

3		4
---	--	---

1		3
---	--	---

4		1
---	--	---

Større eller mindre end **LØSNING**

Et sandslot er større end et sneglehus



En bi er mindre end en is

7	<	9
---	---	---

4	<	6
---	---	---

8	>	5
---	---	---

3	>	1
---	---	---

4	<	7
---	---	---

5	<	7
---	---	---

7	>	4
---	---	---

2	>	0
---	---	---

2	<	6
---	---	---



3	<	4
---	---	---

1	<	3
---	---	---

4	>	1
---	---	---

Større eller mindre end

En bil er større end et hjul



En åre er mindre end en båd

4		5
---	--	---

5		8
---	--	---

9		8
---	--	---

6		3
---	--	---

1		2
---	--	---

3		9
---	--	---

7		4
---	--	---

7		8
---	--	---

3		6
---	--	---

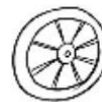

4		2
---	--	---

4		7
---	--	---

1		0
---	--	---

Større eller mindre end **LØSNING**

En bil er større end et hjul



En åre er mindre end en båd

4	<	5
---	---	---

5	<	8
---	---	---

9	>	8
---	---	---

6	>	3
---	---	---

1	<	2
---	---	---

3	<	9
---	---	---

7	>	4
---	---	---

7	<	8
---	---	---

3	<	6
---	---	---

4	>	2
---	---	---

4	<	7
---	---	---

1	>	0
---	---	---

Større eller mindre end

En snemand er større end et par vanter



En sneskovl er mindre end en lastbil

5		6
---	--	---

7		5
---	--	---

3		1
---	--	---

2		5
---	--	---

4		7
---	--	---

6		4
---	--	---

3		8
---	--	---

1		3
---	--	---

4		2
---	--	---

9		7
---	--	---

0		4
---	--	---

7		9
---	--	---

Større eller mindre end **LØSNING**

En snemand er større end et par vanter



En sneskovl er mindre end en lastbil

5	<	6
---	---	---

7	>	5
---	---	---

3	>	1
---	---	---

2	<	5
---	---	---

4	<	7
---	---	---

6	>	4
---	---	---

3	<	8
---	---	---

1	<	3
---	---	---

4	>	2
---	---	---

9	>	7
---	---	---

0	<	4
---	---	---

7	<	9
---	---	---