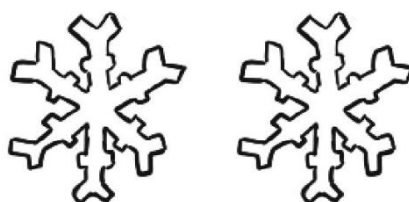


Minus


Sæt streg over figurene og skriv det rigtige tal.




$$3 - 3 =$$




$$2 - 1 =$$




$$8 - 6 =$$



$$6 - 5 =$$



$$5 - 5 =$$



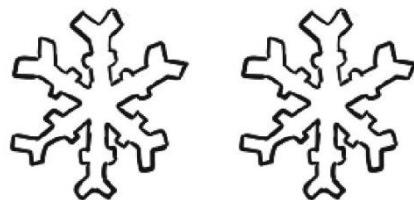
$$7 - 6 =$$

Minus LØSNING


Sæt streg over figureerne og skriv det rigtige tal.




$$3 - 3 = 0$$




$$2 - 1 = 1$$




$$8 - 6 = 2$$



$$6 - 5 = 1$$



$$5 - 5 = 0$$



$$7 - 6 = 1$$